

Total Pages : 2

B.Sc./1st Sem/GEO/25(NEP)/Pr.

2025

1st Semester Examination (CCFUP : NEP)


GEOGRAPHY

Paper : MJ 1-P (Single Core Major)

(Geotectonics and Geomorphology)

(Practical)

Set - 1



Full Marks : 20

Time : Three Hours

*The figures in the margin indicate full marks.*


Answer *all* the questions.


1. Study the given Geological Map and attempt the following :

- (a) Draw a neat Geological section along the line — MN marked on the map with proper annotation and heading.
- (b) Interpret geological structure.
- (c) Analyse topographical expression of underlying structure. 6+2+2

P.T.O.

2. Identify the given five specimen rocks and minerals and write at least two characteristics of each. 5
3. Laboratory Notebook and Viva-voce. 5





Geography, Paper : MJ 1-P (Single Core Major)

Question Number 1 (a)

